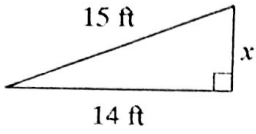


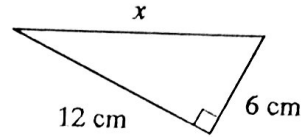
1.4: Right Triangle Trig Review

Find the missing side of each triangle.

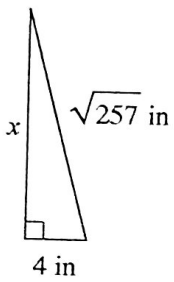
1)



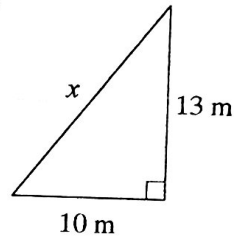
2)



3)

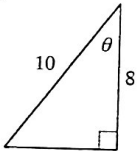


4)

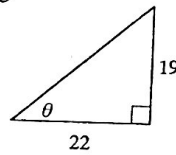


Find the value of the trig ratio.

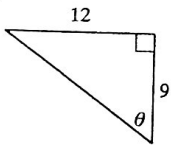
5) $\tan \theta$



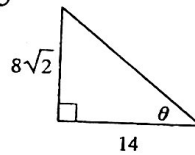
6) $\sin \theta$



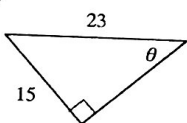
7) $\sin \theta$



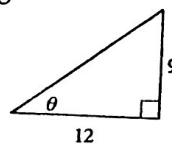
8) $\cos \theta$



9) $\sin \theta$



10) $\sin \theta$



Find the measure of each side or angle indicated. Round to the nearest tenth.

